
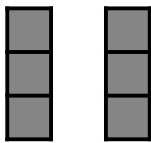
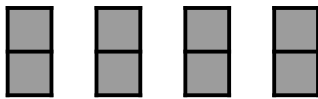
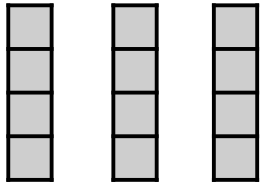
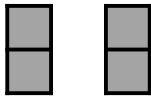



# Multiplication as Repeated Addition

Fill in the missing expressions, phrases, and results in the table.

Array



Addition Expression	Grouping Phrase	Multiplication Expression	Result
$3 + 3 + 3$			
		$2 \times 2$	
	2 groups of 6		
			12
		$4 \times 2$	
	2 groups of 3		
$4 + 4 + 4$			