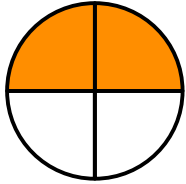
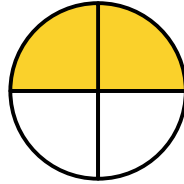
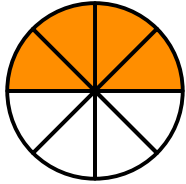


Piece by Piece: Equivalent Fractions

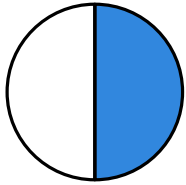
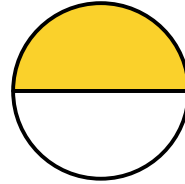
Write the equivalent fractions.



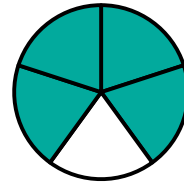
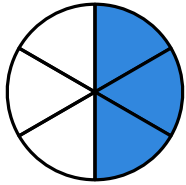
$$\frac{2}{4} = \frac{4}{8}$$



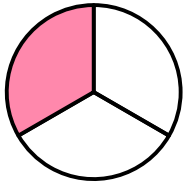
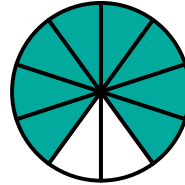
$$\frac{\quad}{\quad} = \frac{\quad}{\quad}$$



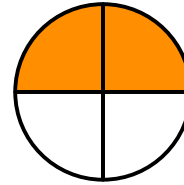
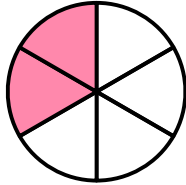
$$\frac{\quad}{\quad} = \frac{\quad}{\quad}$$




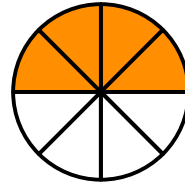
$$\frac{\quad}{\quad} = \frac{\quad}{\quad}$$



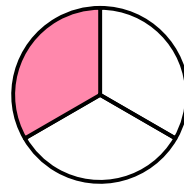
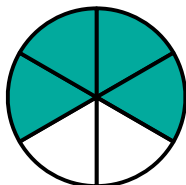
$$\frac{\quad}{\quad} = \frac{\quad}{\quad}$$



$$\frac{\quad}{\quad} = \frac{\quad}{\quad}$$



$$\frac{\quad}{\quad} = \frac{\quad}{\quad}$$



$$\frac{\quad}{\quad} = \frac{\quad}{\quad}$$

