







New Tricks: Adding and Subtracting Decimals

Fluff and Fetch pet store is selling dog supplies. Use the price list below to help you answer the questions.

					
treats	bed	toys	food	collar	leash
\$11.25	\$41.89	\$9.42	\$23.56	\$8.19	\$18.54

- 1 How much more does the bed cost than the food?
- 2 How much do the treats and the toys cost all together?
- 3 Jack spent \$100.00 on various items and returns the dog bed. How much will he get back?
- 4 Mr. O buys toys, a collar, and a leash. How much does he spend?
- 5 Nadine buys two bags of dog food and treats. What is the total price?
- 6 Olivia has \$50.00. What is the maximum number of different items she can buy from the list?