
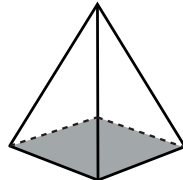
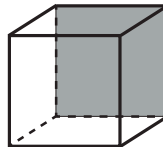
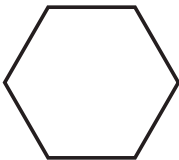
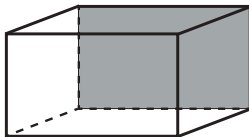
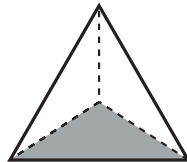
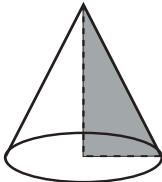
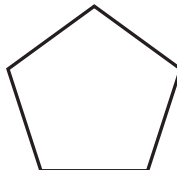
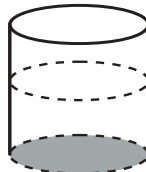
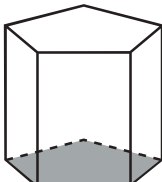

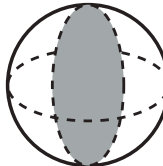


Identify 2D and 3D Shapes

Circle whether the shape is 2D or 3D, then use the list below to write the correct shape name in the box.

hexagon	tetrahedron	pentagon	rectangular prism	pentagonal prism	sphere
triangle	cylinder	square pyramid	cube	cone	trapezoid

		
<div>2D</div> <div>3D</div> <div>trapezoid</div>	<div>2D</div> <div>3D</div> <div>square pyramid</div>	<div>2D</div> <div>3D</div> <div>cube</div>
		
<div>2D</div> <div>3D</div> <div>hexagon</div>	<div>2D</div> <div>3D</div> <div>rectangular prism</div>	<div>2D</div> <div>3D</div> <div>tetrahedron</div>
		
<div>2D</div> <div>3D</div> <div>cone</div>	<div>2D</div> <div>3D</div> <div>pentagon</div>	<div>2D</div> <div>3D</div> <div>cylinder</div>
		
<div>2D</div> <div>3D</div> <div>pentagonal prism</div>	<div>2D</div> <div>3D</div> <div>triangle</div>	<div>2D</div> <div>3D</div> <div>sphere</div>