


# Multiplication Using Arrays


Color the rows and columns to match the two numbers being multiplied. Then, count the squares to find the answer!

$2 \times 6$




$2 \times 6 = \underline{\quad}$

$4 \times 5$




$4 \times 5 = \underline{\quad}$

$3 \times 6$




$3 \times 6 = \underline{\quad}$

$3 \times 3$




$3 \times 3 = \underline{\quad}$

$5 \times 2$




$5 \times 2 = \underline{\quad}$

$4 \times 4$




$7 \times 2 = \underline{\quad}$

$6 \times 5$




$6 \times 5 = \underline{\quad}$

$2 \times 3$



$2 \times 3 = \underline{\quad}$

$5 \times 5$



$5 \times 5 = \underline{\quad}$