
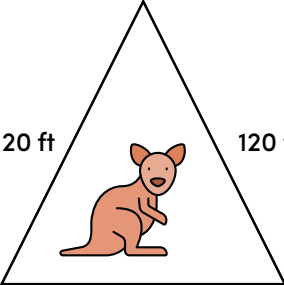

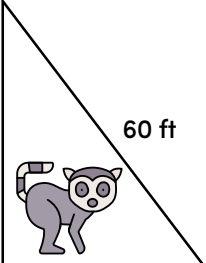
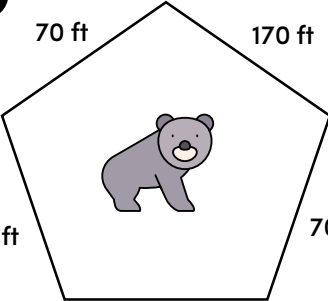

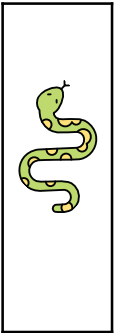




Name:

Date:

Shape Up the Zoo: Perimeter Practice

Welcome to the Wild Geometry Reserve! You're the newest ranger—grab your measuring tape and help fence in the animals! Find the perimeter of each enclosure.

<p>1</p>  <p>100 ft</p> <p>100 ft</p> <p>100 ft</p> <p>P = _____ ft</p>	<p>2</p>  <p>120 ft</p> <p>120 ft</p> <p>100 ft</p> <p>P = _____ ft</p>	<p>3</p>  <p>108 ft</p> <p>72 ft</p> <p>72 ft</p> <p>108 ft</p> <p>P = _____ ft</p>
<p>4</p>  <p>48 ft</p> <p>60 ft</p> <p>36 ft</p> <p>P = _____ ft</p>	<p>5</p>  <p>70 ft</p> <p>170 ft</p> <p>70 ft</p> <p>70 ft</p> <p>P = _____ ft</p>	<p>6</p>  <p>80 ft</p> <p>150 ft</p> <p>150 ft</p> <p>80 ft</p> <p>P = _____ ft</p>
<p>7</p>  <p>8 ft</p> <p>32 ft</p> <p>32 ft</p> <p>8 ft</p> <p>P = _____ ft</p>	<p>8</p>  <p>15 ft</p> <p>120 ft</p> <p>120 ft</p> <p>45 ft</p> <p>P = _____ ft</p>	<p>9</p>  <p>15 ft</p> <p>120 ft</p> <p>120 ft</p> <p>15 ft</p> <p>P = _____ ft</p>