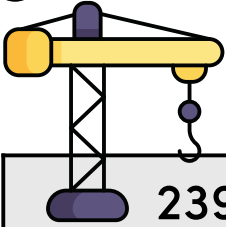
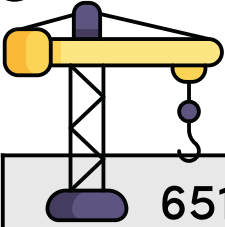
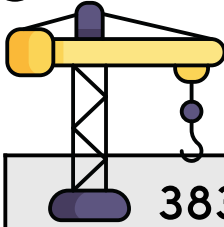
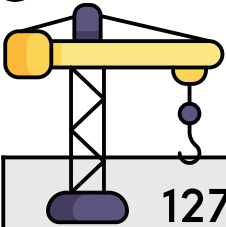
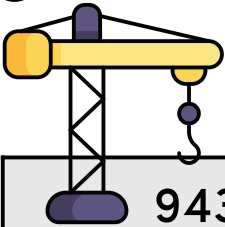
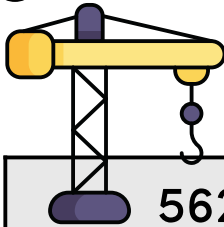
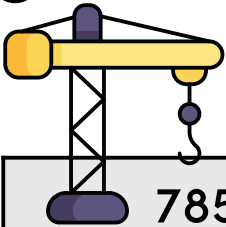
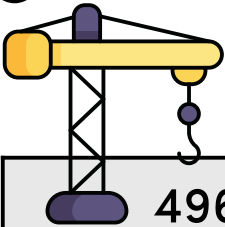
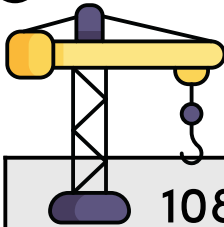


Name:

Date:

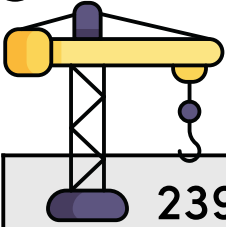
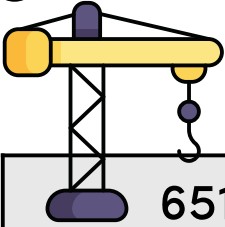
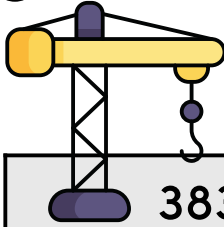
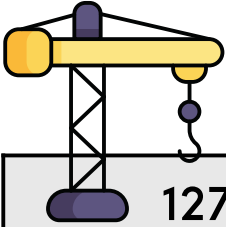
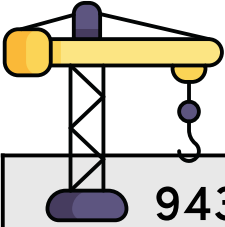
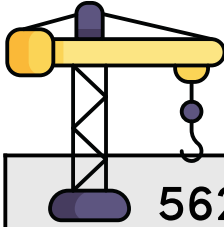
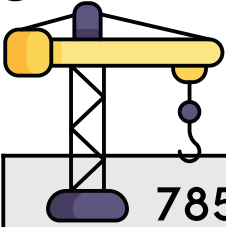
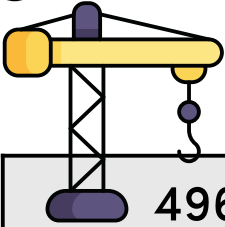
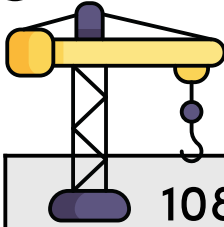
# Under Construction: Place Value to the Hundreds

Look at the number being lifted by the crane. Then write the number in expanded form using the boxes below. Start with the largest place value and match each digit to the correct-sized box.

<div>1</div>  <div>239</div> <div><div>200</div> + <div>30</div> + <div>9</div></div>	<div>2</div>  <div>651</div> <div><div></div> + <div></div> + <div></div></div>	<div>3</div>  <div>383</div> <div><div></div> + <div></div> + <div></div></div>
<div>4</div>  <div>127</div> <div><div></div> <div></div> <div></div></div>	<div>5</div>  <div>943</div> <div><div></div> <div></div> <div></div></div>	<div>6</div>  <div>562</div> <div><div></div> <div></div> <div></div></div>
<div>7</div>  <div>785</div> <div><div></div> <div></div> <div></div></div>	<div>8</div>  <div>496</div> <div><div></div> <div></div> <div></div></div>	<div>9</div>  <div>108</div> <div><div></div> <div></div> <div></div></div>

# Under Construction: Place Value to the Hundreds

Look at the number being lifted by the crane. Then write the number in expanded form using the boxes below. Start with the largest place value and match each digit to the correct-sized box.

<div>1</div>  <div>239</div> <div><div>200</div> + <div>30</div> + <div>9</div></div>	<div>2</div>  <div>651</div> <div><div>600</div> + <div>50</div> + <div>1</div></div>	<div>3</div>  <div>383</div> <div><div>300</div> + <div>80</div> + <div>3</div></div>
<div>4</div>  <div>127</div> <div><div>100</div> + <div>20</div> + <div>7</div></div>	<div>5</div>  <div>943</div> <div><div>900</div> + <div>40</div> + <div>3</div></div>	<div>6</div>  <div>562</div> <div><div>500</div> + <div>60</div> + <div>2</div></div>
<div>7</div>  <div>785</div> <div><div>700</div> + <div>80</div> + <div>5</div></div>	<div>8</div>  <div>496</div> <div><div>400</div> + <div>90</div> + <div>6</div></div>	<div>9</div>  <div>108</div> <div><div>100</div> + <div>0</div> + <div>8</div></div>