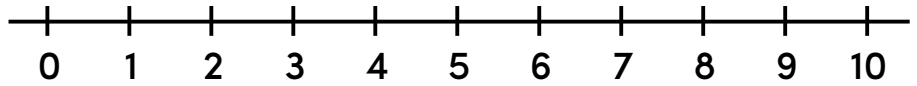


Name: _____

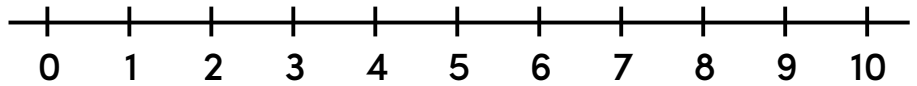
Add It Up! Number Line Addition

Use the number line to count forward and solve each problem. Write your answer in the box.

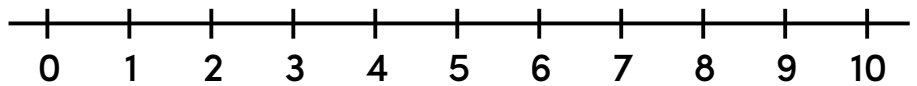
$1 + 4 = \boxed{}$



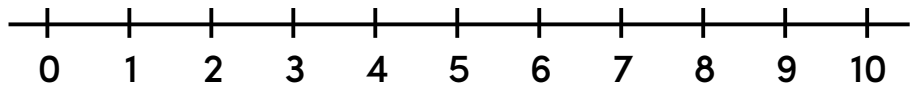
$2 + 3 = \boxed{}$



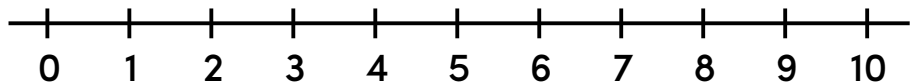
$0 + 9 = \boxed{}$



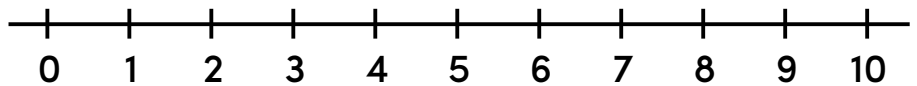
$7 + 2 = \boxed{}$



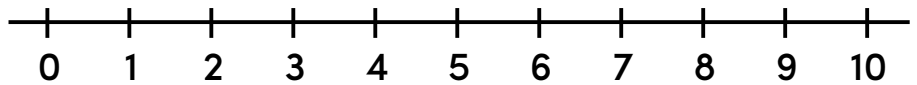
$5 + 3 = \boxed{}$



$6 + 4 = \boxed{}$



$2 + 8 = \boxed{}$



$3 + 4 = \boxed{}$

