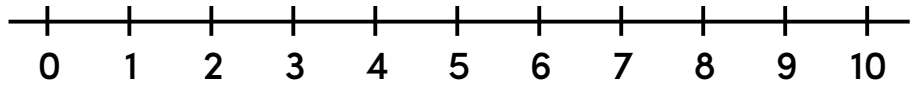


Name: \_\_\_\_\_

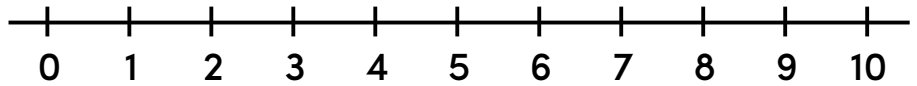
## Back It Up! Number Line Subtraction

Use the number line to count backward and solve each problem. Write your answer in the box.

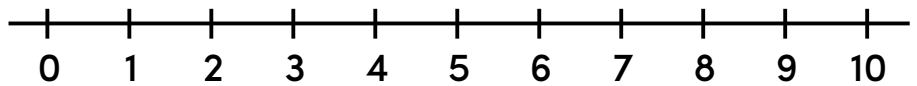
$9 - 4 = \boxed{\phantom{00}}$



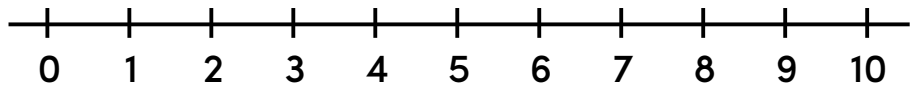
$7 - 3 = \boxed{\phantom{00}}$



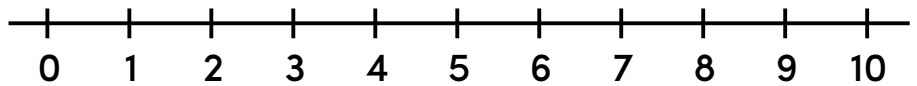
$8 - 6 = \boxed{\phantom{00}}$



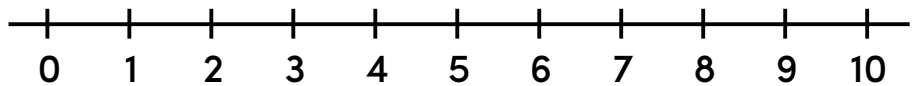
$5 - 2 = \boxed{\phantom{00}}$



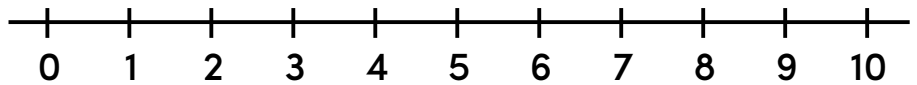
$7 - 5 = \boxed{\phantom{00}}$



$3 - 1 = \boxed{\phantom{00}}$



$6 - 5 = \boxed{\phantom{00}}$



$4 - 2 = \boxed{\phantom{00}}$

