

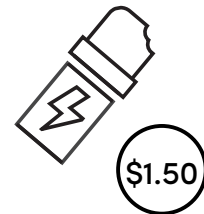


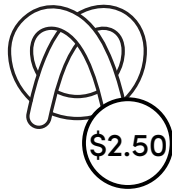
Name:

Date:

Tally the Treats! Money Math Practice

Look at the menu and see what each customer buys. Add the prices of the 4 items to find the total cost for each customer.

SNACK MENU



Customer #1



+



+




+



=

Total

Customer #2



+



+



+



=

Total

Customer #3



+



+



+



=

Total